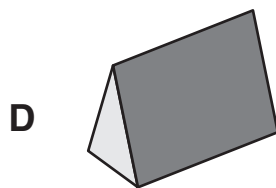
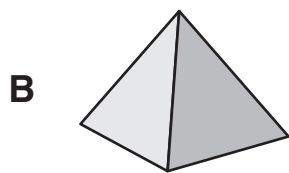
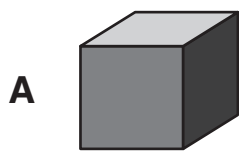


- 1** Hessa was playing a computer game.
She scored 43 points in Round 1 and 26 points in Round 2.
Which sum could she use to add the points together?

- A** $40 + 20 + 3 + 6$
- B** $4 + 3 + 2 + 6$
- C** $40 + 30 + 20 + 60$
- D** $30 + 4 + 60 + 2$

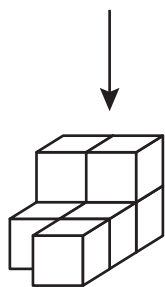
- 2** Which one of these is a triangular prism?



- 3** 4,223, 4,213, ?, 4,193, 4,183

What is the missing number?

- A** 4,200
- B** 4,203
- C** 4,210
- D** 4,212



4 What does the stack look like from above?

