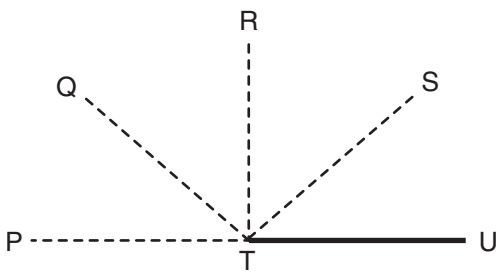


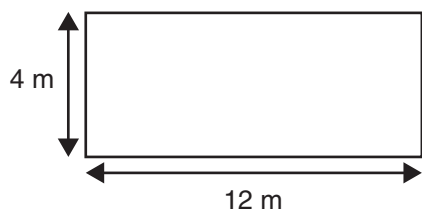
- 1** Last year, 34 boys and 28 girls started a club. Nobody left the club. This year, 13 more boys and 7 more girls joined the club. How many people are in the club this year?

- A** 20
- B** 54
- C** 62
- D** 82

- 2** Which line makes an angle of 135° with TU?



- A** TP
- B** TQ
- C** TR
- D** TS

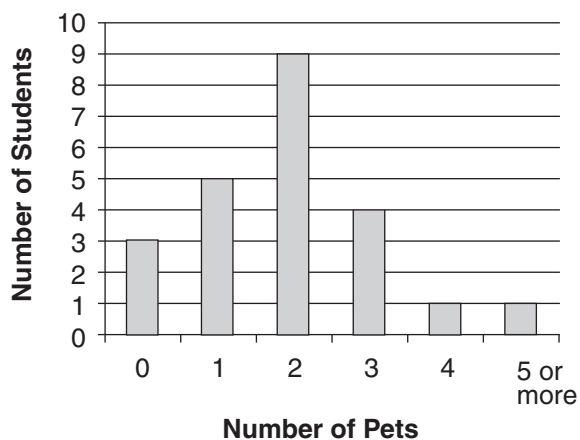


3 What is the area of the rectangle?

- A 3 m²
- B 16 m²
- C 32 m²
- D 48 m²

4 This graph shows the number of pets owned by the students in Class 5.

Pets Owned by Class 5 Students



How many students have 2 or more pets?

- A 9
- B 15
- C 16
- D 23