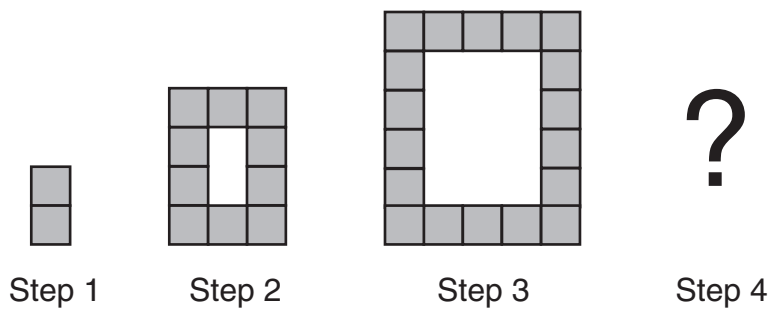


1 What is the area of the shape?

- A 240 cm<sup>2</sup>
- B 320 cm<sup>2</sup>
- C 400 cm<sup>2</sup>
- D 480 cm<sup>2</sup>

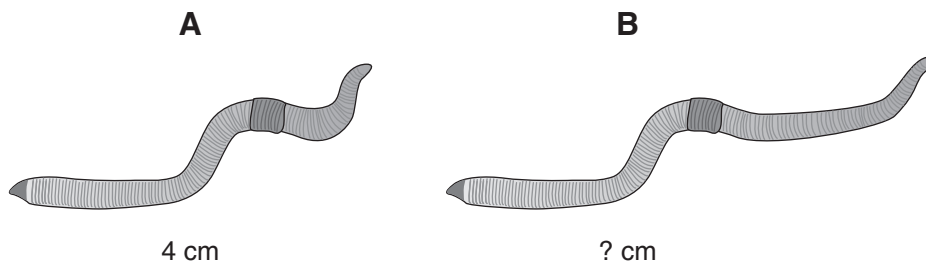
2 There are two blocks in Step 1, and 10 blocks in Step 2.



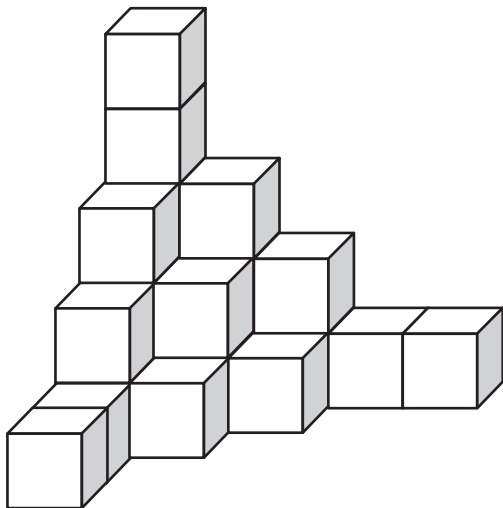
How many blocks will there be in Step 4?

- A 20
- B 26
- C 36
- D 40

- 3** The ratio of the length of Worm A to Worm B is 2 : 3.  
What is the length of Worm B?



- A** 2 cm
- B** 5 cm
- C** 6 cm
- D** 12 cm



- 4** What is the total number of small cubes in this stack?

- A** 13
- B** 20
- C** 23
- D** 25