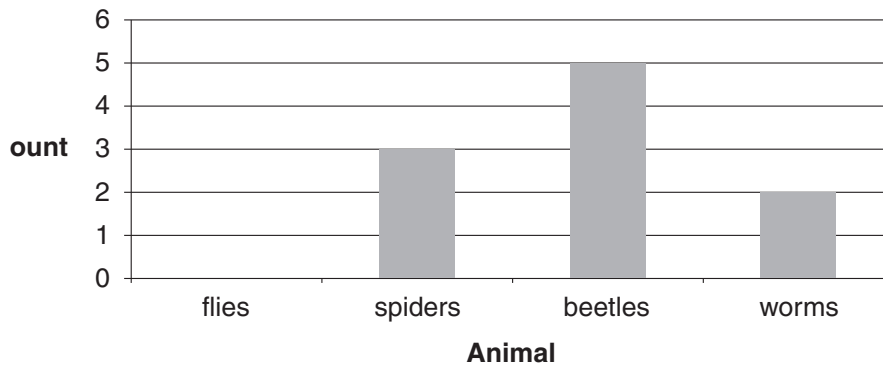


Jasmin counted the animals she found in her garden. She drew a table to show how many animals she found.

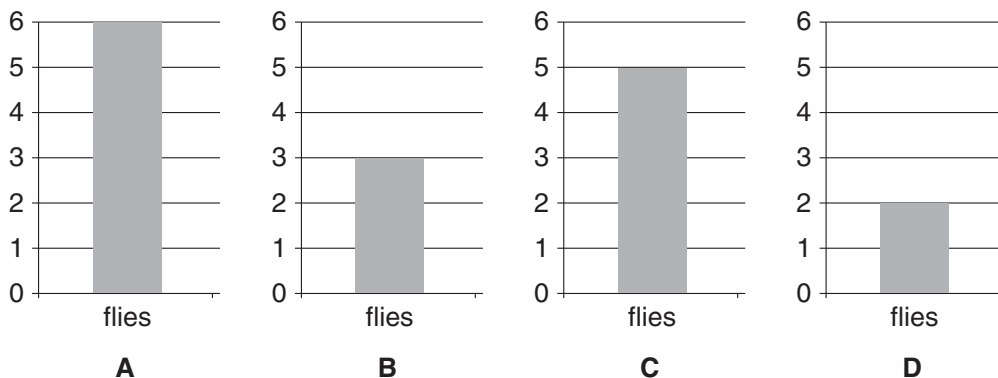
Animal	Count
flies	6
spiders	3
beetles	5
worms	2

- 1** How many animals did Jasmin find altogether?
- A** 6
 - B** 9
 - C** 16
 - D** 20

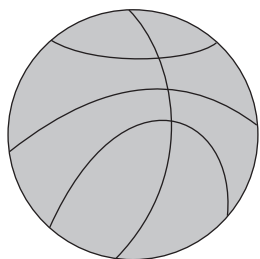
- 2** Jasmin drew a graph to show how many animals she found.



Which picture shows the missing column for flies?



Mani wants to show the size of the Earth, Moon and Sun.
He will use a basketball, baseball, and golf ball.



basketball



baseball



golf ball

3 Which arrangement is best?

	Earth	Moon	Sun
A	baseball	basketball	golf ball
B	golf ball	baseball	basketball
C	golf ball	basketball	baseball
D	baseball	golf ball	basketball